

## LESSON 6: GEOMORPHOLOGY II

### SECTION A: SLOPES

#### Key Concepts

In this lesson we will focus on summarising what you need to know about:

- Overview of South Africa's topography
- Types of slopes
- Slope elements
- Characteristics of slope elements
- Slope development over time and the concept of slope retreat

#### X-Planation

##### Overview of South Africa's Topography

SA's landscape has been shaped over a long time by movement below the surface of the Earth and by the movement of water across the surface of the Earth. Different layers of rocks have been laid down over millions of years and then shaped by erosion. Different strata and rock formations are eroded and the topography results from these processes.



#### What is a Slope?

The angle which any part of the Earth's surface makes with the horizontal

**OR**

Any geometric element of the Earth's surface.

## Types of Slopes

### Gentle Slope

A slope with contour lines spread far apart from each other. This even spacing is maintained in both up and down slope.



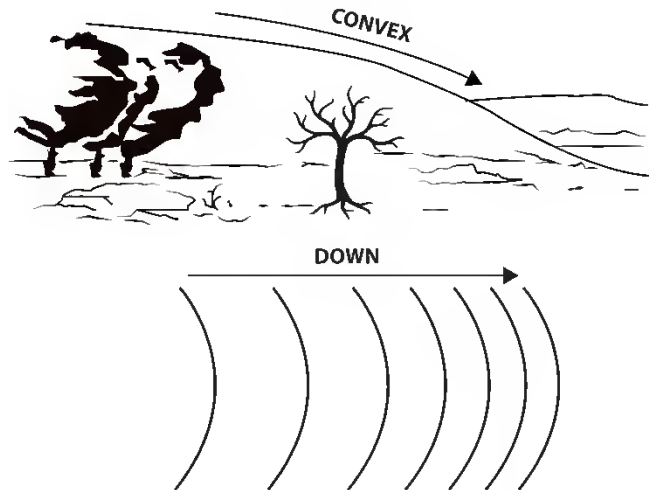
### Steep Slope

A slope represented with contour lines close to each other on a topographical map.



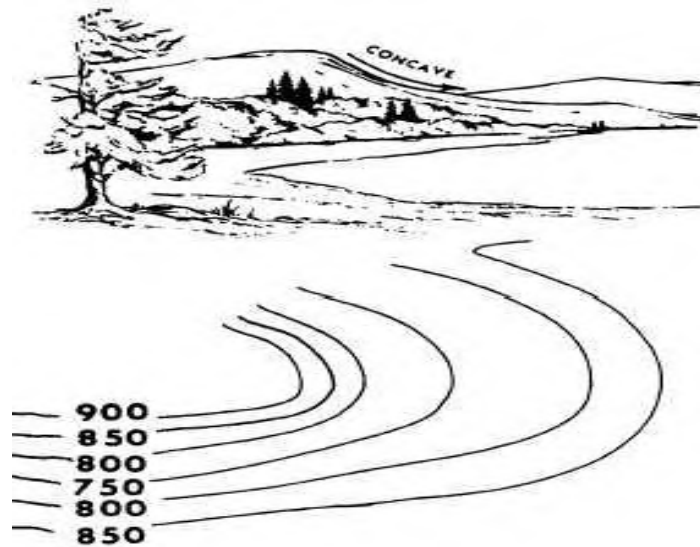
## Convex Slope

A slope which becomes progressively steeper downhill. It can refer to an entire slope or part of one. On a map the contour lines will be spaced closer together with a decline in height above sea-level.



## Concave Slope

A slope which becomes progressively steeper uphill. It can refer to an entire slope or part of one. On a map the Contour lines will be spaced closer with an increase in height above sea-level.



## Tectonic Slopes

These are formed through internal forces that result in the folding, warping and faulting of rock masses or layers. Anticlines and synclines, are formed when layers of rock are folded; while horsts (block mountains) and graben (rift valleys) are formed when blocks of land rise or fall in relation to each other when faulting occurs.




## Depositional Slopes

Deposits of weather material build up to form inclined surfaces, mounds and hills when an agent of erosion (e.g. wind, water or ice) which has lost its energy of motion, lays down its load in a particular place. Examples are alluvial fans, alluvial cones, deltas and sand dunes.



## Slope Elements



### Crest

A small convex-shaped slope, with a thin covering of soil

### Freeface / Scarp Cliff

A near vertical slope, more than 80° to the horizontal

### Talus / Scree / Debris

A slope with a constant angle, and is formed of eroded material from crest and freeface

### Knickpoint

The change in gradient at the base of the scree slope

### Pediment

A low-angle concave slope

## Characteristics of Slopes

### Crest

- Edge of the hill
- Convex
- Thin layer of soil
- Weathered material removed

## Freeface / Scarp Cliff

- > 80° to the horizon
- Layer hard resistant rock
- Loose material falls to bottom of cliff
- Cliff retreats parallel to itself

## Talus / Scree / Debris

- Accumulates from crest and cliff face
- Uniform slope

## Pediment

- Low angle, concave slope
- Slope is not uniform- steeper close to the talus slope
- Pediment increases as the slope increases backwards due to scarp recession

## Slope Development over time and the Concept of Slope Retreat

SLOPE DECLINE (W.M DAVIS, 1899)	
<b>REGION OF STUDY</b>	Theory based on slopes in what was to Davis a normal climate (north-western Europe and north-eastern USA)
<b>CLIMATE</b>	Humid climate
<b>DESCRIPTION OF SLOPE</b>	Steepest slopes at the beginning of the process with a progressively decreasing angle over time to give a convex upper slope and a concave lower slope
<b>CHANGES OVER TIME</b>	Assumed a rapid uplift of land with an immediate onset of denudation. The uplifted land would undergo a cycle of erosion where slopes were initially made steeper by vertical erosion by rivers but later became less steep (slope decline) until the land was almost flat (peneplain)
SLOPE REPLACEMENT (W. PENCK, 1924)	
<b>REGION OF STUDY</b>	Conclusions drawn from evidence of slopes in the Alps and Andes
<b>CLIMATE</b>	Tectonic areas
<b>DESCRIPTION OF SLOPE</b>	The maximum angle decreases as the gentler lower slopes erode back to replace the steeper ones giving a concave central part of to the slope
<b>CHANGES OVER TIME</b>	Assumed landscape started with a vertical rock slope with equal weathering overall. As scree (talus) collected at the foot of the cliff it gave a gentler slope which, as the scree grew, replaced the original one.




PARALLEL RETREAT (L.C KING, 1948, 1957)	
<b>REGION OF STUDY</b>	Based on slopes in South Africa
<b>CLIMATE</b>	Semi-arid landscapes. Also sea cliffs with wave-cut platforms
<b>DESCRIPTION OF SLOPE</b>	The maximum angle remains constant as do all slope facets apart from the lower one which increases in concavity
<b>CHANGES OVER TIME</b>	Assumed that slopes had two facets- a gently concave lower slope or pediment and a steeper upper slope (scarp). Weathering caused the parallel retreat of the scarp slope allowing the pediment to extend in size

## X-ample Questions

### Question 1

Refer to the FIGURE showing elements of a slope to answer the questions.



- a.) Identify the slope elements labeled A, B, C, and D. (4 x 2) (8)  
 b.) Describe slope element B. (1 x 2) (2)  
 c.) Identify at least ONE factor that promotes fertile soil in area E. (1 x 2) (2)

## SECTION B: MASS MOVEMENTS

### Key Concepts

In this lesson we will focus on summarising what you need to know about:

- Concept of mass movements
- Causes of mass movements
- Kinds of mass movements
- The impact of mass movements on people and the environment
- Strategies to minimise the effects of mass movements

### X-Planation

#### What is Mass Movement?





Mass movement is the down slope movement of earth materials under the influence of gravity.

The detachment and movement of earth materials occurs if the stress imposed is greater than the strength of the material to hold it in place.



### Causes of Mass Movements



Mass wasting is caused by **gravity**. On a mass of material gravity exerts a force downward proportional to the amount of mass.

Because of the effect of **water** on slope stability, many mass wasting events are triggered or hastened by heavy or extended rainfall.

## Kinds of Mass Movements

### Soil Creep

Creep is the slow, continuous movement of soil or unconsolidated sediments over extended periods of time.

Often, the rate of creep is less than a centimeter per year and can only be detected over many years by looking for its effect on the landscape

#### Causes of Soil Creep

- Creep is caused by repeated freeze-thaw cycles that slowly inch material downslope (during freezing, particles are elevated perpendicular to the slope, but during thaws they fall straight down to a new position lower on the slope).
- Creep can also be caused by a buildup of pore water that allows material to begin to flow under the influence of gravity.

#### Effects of Soil Creep

- Creep causes fence posts, utility poles, walls, and other structures to lean over time. Eventually the lean topples the structures and they must be rebuilt.
- In some cases, creep can be slowed or prevented by installing drainage pipes in soils that drain them and keep pore pressures low.



### Solifluction

- It is the down slope movement of soil over a permanently frozen subsurface. Solifluction is common on slopes underlain by permafrost (permanently frozen sub – soil).
- During the summer when the upper permafrost is activated, the waterlogged soil mass slowly moves down slope to form solifluction lobes or terraces.



## Landslides

- A landslide is a movement of rock or debris down a slope along one or more distinct surfaces. Landslides range in speed from 1 m/day to as much as 300 km/hr.



## Rockfalls

- Rockfall (free fall of rock) is an extremely rapid process and occurs without warning.
- Rockfall is typically the result of frost wedging.
- Frost wedging is a process where water enters cracks in rocks, freezes, expands, and breaks the rock apart.

## Mudflows

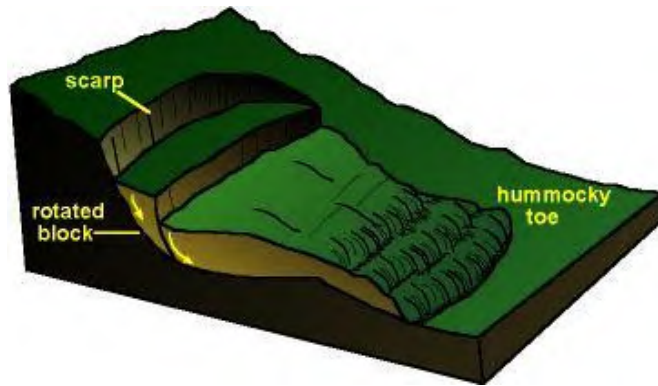
- Occur on moderate-to-steep slopes
- Movement is generally rapid
- Primarily fine-grained material (smaller than sand-sized particles)
- May begin as shallow soil slip (shallow slides in soil over rock that parallels the slope)
- Typically flows down slopes or follows drainage channels



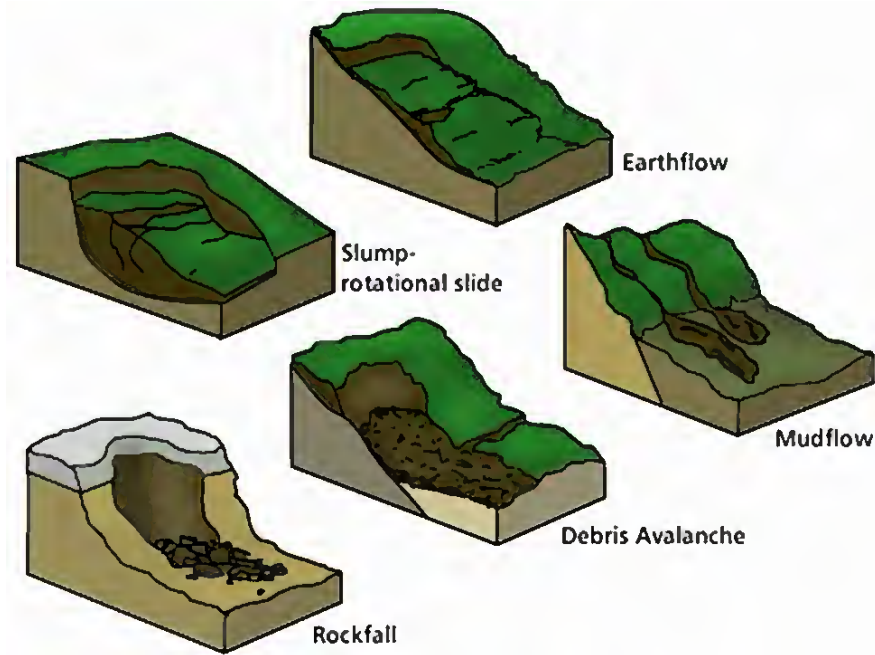
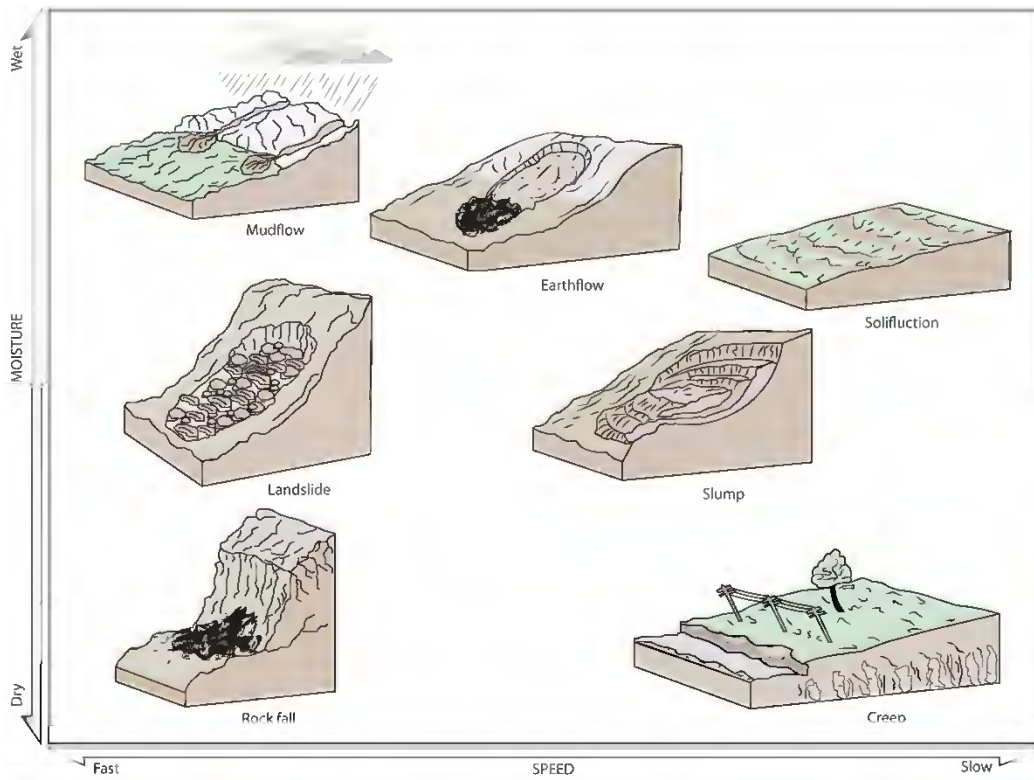


## Slumps

- The sliding of material along a curved surface called a rotational slide or slump.
- A common cause of slumping is erosion at the base of a slope. For example, coastal storm waves erode cliff bases, removing supporting material.
- The slump block rotates downward, producing a scarp (cliff) at the top of the slope.



# Effects of Mass Movement







## Human Impact on Landslides

Excavation into a slope (for a road or construction site) creates a flat area at the base of a slope. However, it also over steepens the slope. Removing the basal support can result in slope failure.

**Harvesting timber** can also have an impact. Removing slope-supporting material (trees and brush), as well as creating roads, affects the landscape. If the surficial (and sometimes subsurface) geology is unstable, mass wasting often occurs.

Urbanization also has an effect on slope stability. **Grading hillsides** (cutting benches for building homes on) greatly increases landslide potential.

**Construction** of homes on unstable slopes has similar effects. Changing the slope face, the additional weight (homes and fill material), plus the added water (homeowners' sprinkler systems and septic tanks) make a formerly stable slope unstable. Add a heavy rainy season and you have lots of landslides!



## Strategies to Minimise the Effect of Mass Movements

Minimizing landslide hazards requires three steps:

1. Identification of landslide potential areas,
2. Prevention of landslides, and
3. Corrective measures when a landslide occurs.

### Identification of Landslide Potential Areas

Identification is accomplished by

- studying aerial photographs to determine sites of previous landslides or slope failures, and
- field investigations of potentially unstable slopes.

Potential mass-wasting areas can be identified by steep slopes, bedding planes inclined toward valley floors, hummocky topography (irregular, lumpy-looking surface) covered by younger trees, water seeps, and areas where landslides have previously occurred. The information is then used to generate a hazard map depicting the various landslide-prone areas.

### Prevention of Landslides

Controlling drainage and reducing the slope angle reduces landslide potential. Concrete interceptor drains can be constructed to contain runoff and prevent infiltration. Steep slopes can be graded into gentler slopes. A series of "stair-steps" can be created on very steep slopes.



Engineering methods can be used to help prevent slope failure. Retaining walls, rock bolts, and "shotcrete" (coating of concrete-rock mixture on slope surface and crevices to prevent water entry) are used to inhibit slope failure. Wire cables and wire fences minimize the danger of rockfall.

### Corrective Measures

Correction of some landslides is possible. This is accomplished by installing a drainage system, which reduces water pressure in the slope, thereby preventing further movement.

The key to preventing damage from landslides is to identify and avoid developing landslide prone areas such as steep, unstable hillsides. However, if some of these areas must be developed then building codes should require extensive efforts to insure slope stabilization:

- vegetation of unstable slopes
- installation of drainage and runoff channeling structures
- benching and regrading of slopes to lessen their steepness
- stabilization structures such as retaining walls, deeply sunk pylons, and backfilled supports

Good slope engineering is expensive and the temptation to cut corners is great. However, landslide damage is far more expensive and estimates have shown that for every rand spent on slope stabilization, between 10 and 2000 rand are saved over the long term.

## X-ample Questions

### Question 1

Refer to the FIGURE showing an element of mass movement.



- Identify the type of mass movement shown in the diagram. (1 x 2) (2)
- Describe how this type of mass movement occurs. (2 x 2) (4)
- Identify at least TWO impacts on human that this type of mass movement would have. (2 x 2) (4)

## X-ercise Questions

### Question 1

*(Adapted from Gr 11 Exemplar, DBE, Paper 1, Question 1.5)*

Read the article in FIGURE 1 and answer the questions that follow.

#### FIGURE 1: LANDSLIDES

The 2010 Uganda landslide occurred in the district of Bududa in eastern Uganda on 1 March 2010. The landslide was triggered by heavy rain between 12:00 and 19:00 that day. At least 100 people are believed to have been killed.

The landslide struck villages on the slopes of Mount Elgon, including Nameti, Kubewo, and Nankobe. Eighty-five homes were destroyed in Nameti alone. Many areas in the affected villages were buried by the landslides, including houses, markets and a church. Many roads were also blocked. Officials and aid workers were worried that further landslides could occur, as heavy rain continued to fall in the region.

[Source: Wikipedia.org]

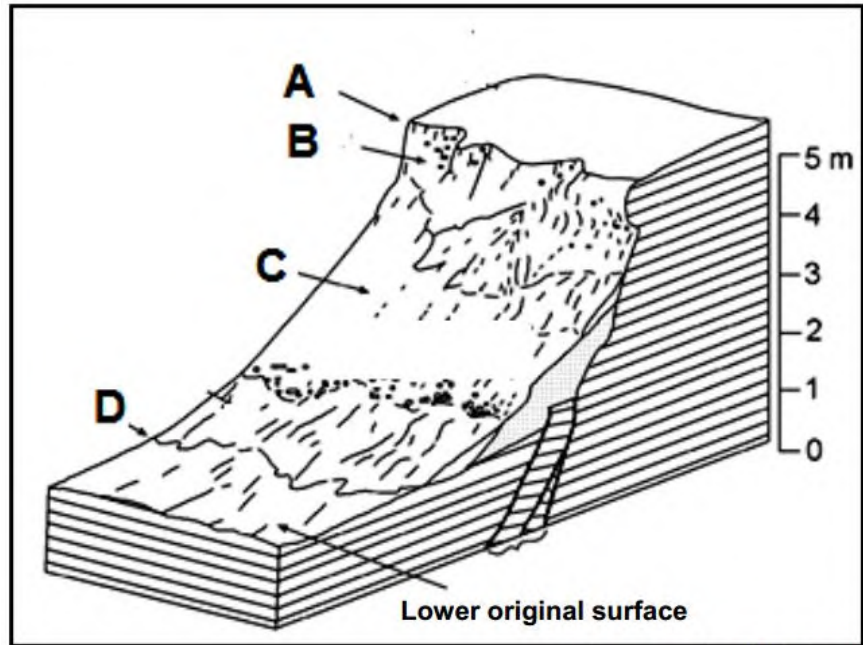
- |     |   |              |
|-----|---|--------------|
| 1.1 | Define the term landslide.  | (1 x 2) (2)  |
| 1.2 | Where do landslides generally occur?  | (1 x 2) (2)  |
| 1.3 | State TWO causes of landslides.   | (2 x 2) (4)  |
| 1.4 | Describe THREE impacts of landslides on people and the environment.   | (3 x 2) (6)  |
| 1.5 | Write a short paragraph in which you explain strategies that can be used to prevent, or minimise, the effect of mass movements. | (6 x 2) (12) |

## Question 2

(Adapted from Gr 11 Exemplar, DBE, Paper 1, Question 2.6)

Refer to FIGURE 2 shows the typical slope elements/forms associated with a slope.

**FIGURE 2: SLOPE ELEMENTS/FORMS**



[Source: Google Image]

- 2.1 Identify the slope elements/forms labelled A, B, C and D. (4 x 2) (8)
- 2.2 Give ONE characteristic of each of the slope elements/forms labelled A and C. (2 x 2) (4)
- 2.3 Explain why slope element/form D is useful to farmers. (2 x 2) (4)

## Solutions to X-ercise Questions

### Question 1

(Adapted from Gr 11 Exemplar, DBE, Paper 1, Question 1.5)

- 1.1 Landslide refers to a sudden movement of a block of the land surface
- 1.2 On hill slopes
- 1.3 Heavy rainfall  
Earthquakes  
Removal of part of slope due to construction
- 1.4 A landslide may fall across a river, damming the water  
A new lake can form



The above could cause flooding  
Can cause great destruction across a wide area of habitable land  
Destruction of vegetation  
Houses destroyed  
Farmland/crops destroyed  
People killed/buried alive

- 1.5 Using wire to hold the rock in place  
Building gabions at the base of the slope  
Spraying concrete on the side of the slope to stabilize the rock slope  
Drilling bolts into the side of the hill slope  
Covering slopes with nets  
Avoid development along unstable slopes  
Using early signs to detect land movements and instability of slopes  
Completing environmental impact study before development on steep slopes  
Closing roads to ensure the safety of people when slopes become unstable  
Artificial rockfalls to stabilise slopes  
Building roofs over roads along steep slopes

## Question 2

*(Adapted from Gr 11 Exemplar, DBE, Paper 1, Question 2.6)*

- 2.1 **A** - crest/waxing slope  
**B** - cliff/free face/scarp  
**C** - talus/scree/debris/constant slope  
**D** - pediment
- 2.2 **A** convex  
soil creep  
top of slope  
**C** consist of weathered material  
angle of approximately 35°  
slope remains constant
- 2.3 Gentle slope  
Covered with soil layer